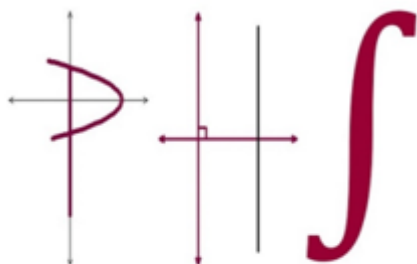
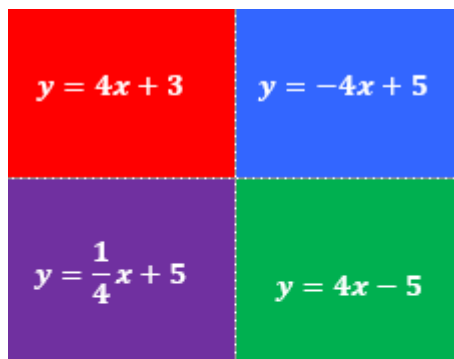


Front




MATH DEPARTMENT
 $2^5 \cdot 3^2(7) - 2.017x 10^3$

Algebra 1 – Back



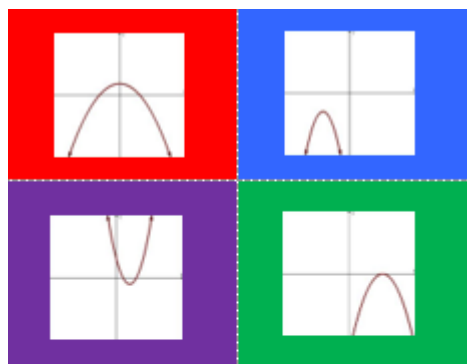
What do you notice?
 What do you wonder?
 How are these similar/different?
 Which one does not belong?
 Explain your thinking. Convince me!

Geometry – Back



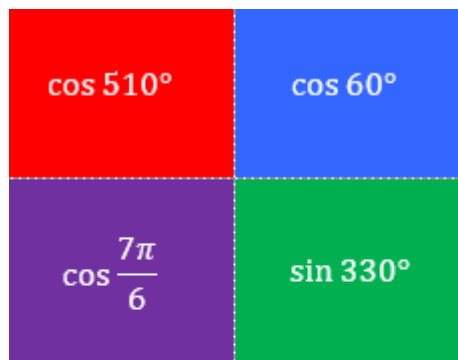
What do you notice?
 What do you wonder?
 How are these similar/different?
 Which one does not belong?
 Explain your thinking. Convince me!

Algebra 2 – Back



What do you notice?
 What do you wonder?
 How are these similar/different?
 Which one does not belong?
 Explain your thinking. Convince me!

Precalculus/Calculus – Back



What do you notice?
 What do you wonder?
 How are these similar/different?
 Which one does not belong?
 Explain your thinking. Convince me!